








Can you work out the missing prices by solving the addition number sentences below?	Price List:	6p 	8p 	10p 
	<input type="text"/> 	<input type="text"/> 	<input type="text"/> 	<input type="text"/> 

$$\text{KANGA-ROOBARB} + \text{QUACKERS} = 13\text{p}$$

$$\text{PRICKLED ONIONS} + \text{CROCOLATE DROPS} = 18\text{p}$$

$$\text{APE-RICOT YOGHURT} + \text{ROARSBERRY RIPPLE} = 20\text{p}$$

$$\text{QUACKERS} + \text{SALT AND FIN-EGAR CRISPS} = 19\text{p}$$

Complete this number sentence:

$$\text{CROCOLATE DROPS} + \text{ROARSBERRY RIPPLE} = \text{?}$$

I can solve addition missing number sentences 😊

I can solve problems involving money. 😊