

Can you put these coins in order of value, and label them?



1p

£1

2p

£2




10p

20p

5p

50p

I can solve a problem involving
addition and missing number sentences
in the context of money.



Little Red Riding Hood has a list
of the Wolf's favourite food.
This is what he likes:



She goes to the shop and this is what she
gets...

Price list

6p



9p



7p



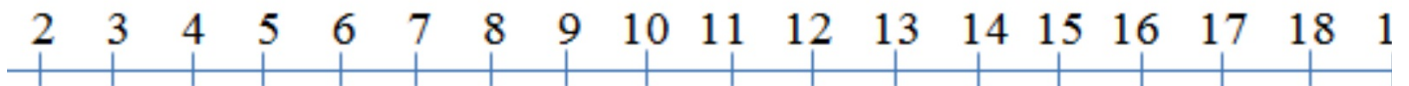
Can you use the price list above, to help you answer this addition number sentence and work out the total to pay?



+



=



Price list

6p



9p



7p



+



=

Price list

6p



9p



7p



?



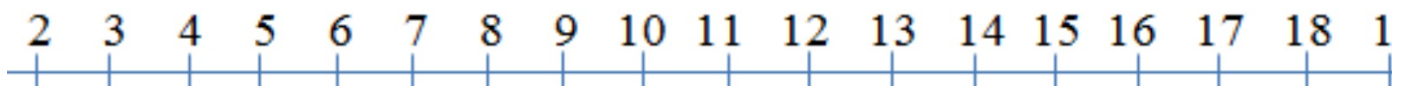
Oh no! We don't have a price for the yoghurt! Can you use the number sentence below, to work out how much the yoghurt costs?



+



= 12p



Price list

6p



?



7p



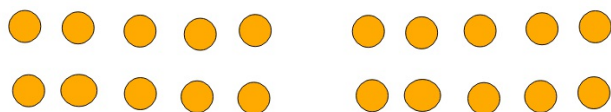
9p



+



= 20p



Your turn:



Can you work out the missing prices by solving the addition number sentences below?	Price List:	6p	8p	10p

$$\text{Kuvva Yogurt} + \text{Fruit and Yogurt Drops} = 13\text{p}$$

$$\text{Pickled Onions} + \text{Fruit and Yogurt Drops} = 18\text{p}$$

$$\text{Ape-Ricot Yogurt} + \text{Fruit and Yogurt Drops} = 20\text{p}$$

$$\text{Fruit and Yogurt Drops} + \text{Fruit and Yogurt Drops} = 19\text{p}$$

Complete this number sentence:

$$\text{Fruit and Yogurt Drops} + \text{Fruit and Yogurt Drops} =$$

I can solve addition missing number sentences. ☺

I can solve problems involving money. ☺