


☺ I can recognise and describe 2D shapes.


Which shape is the odd one out?

Explain your reasoning.



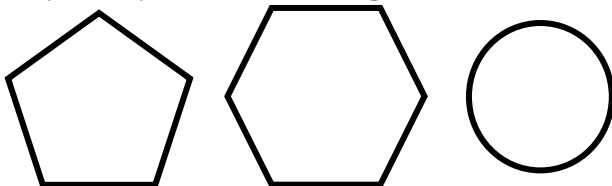
Which shape is not a triangle?

Explain your reasoning.



Which shape is the odd one out?

Explain your reasoning.



What is the same about a square and a rectangle?

